




संख्याएँ

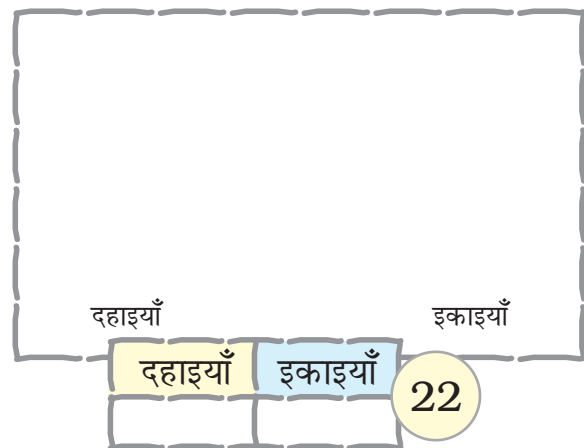
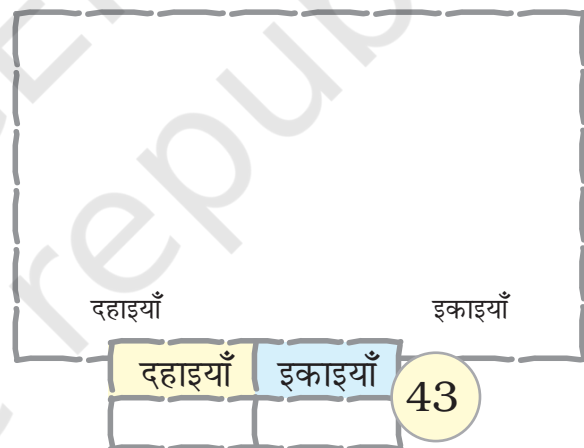
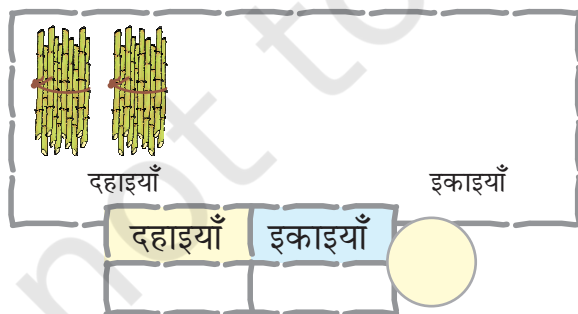
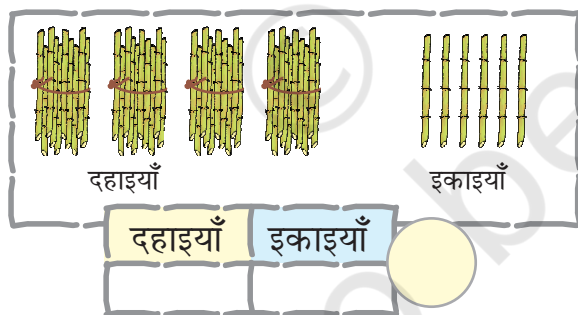
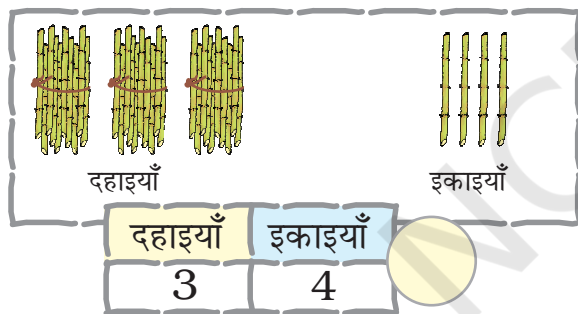


0120CH11



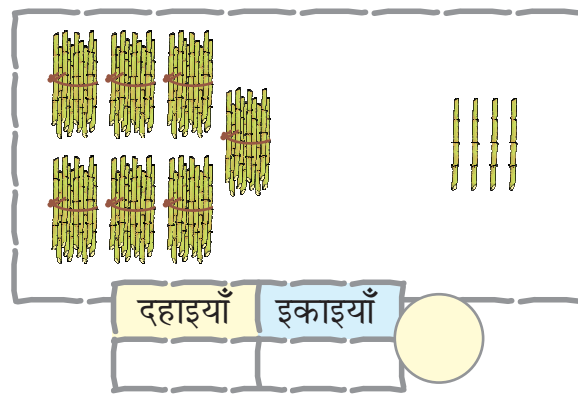
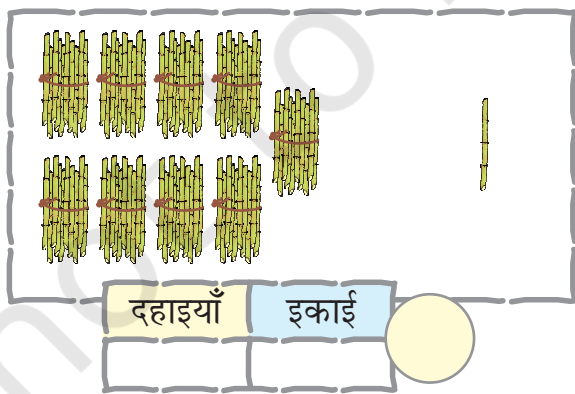
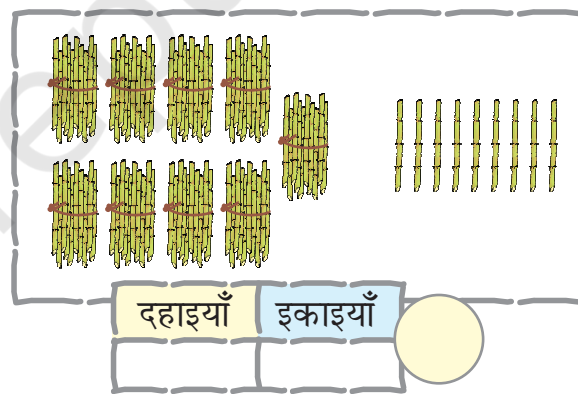
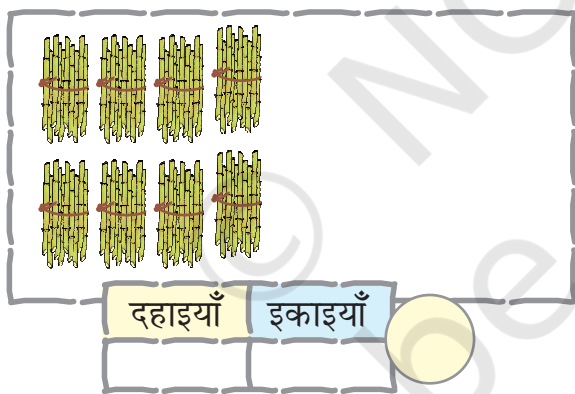
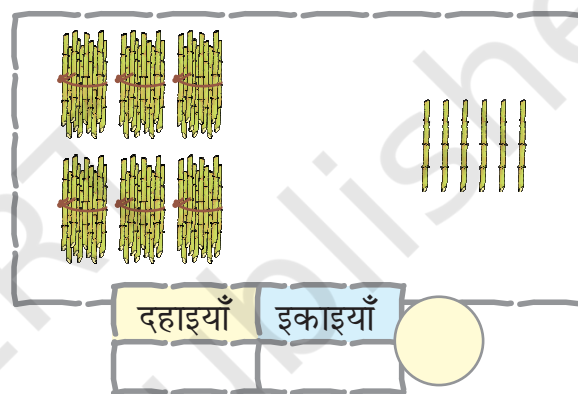
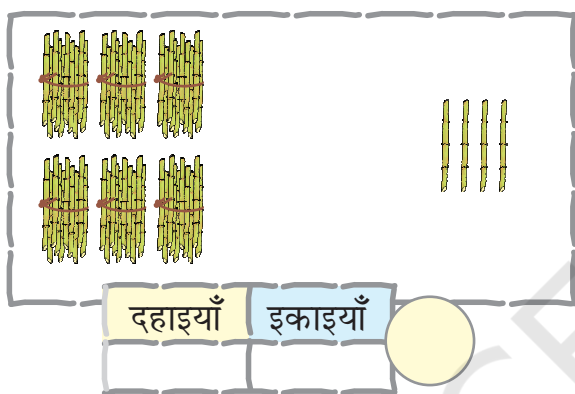
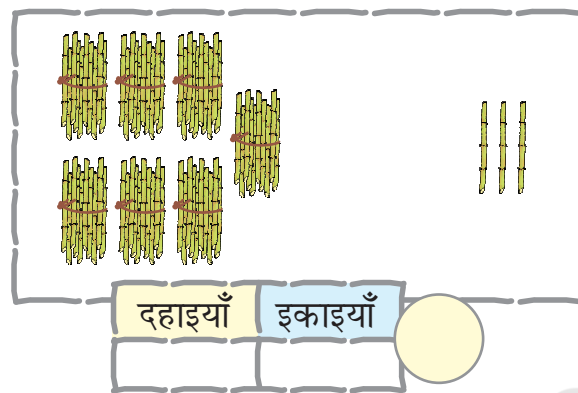
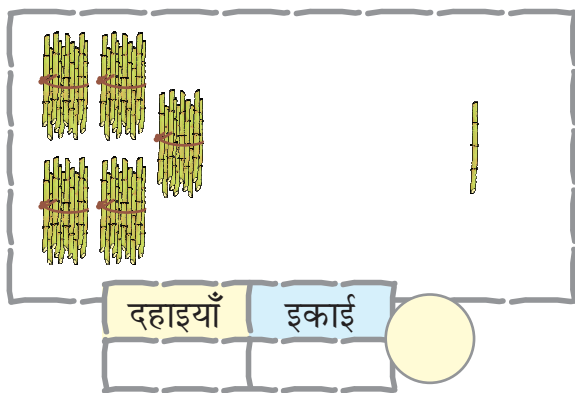
संख्या लिखिए

संख्याओं के दहाइयों के बंडल और इकाइयाँ बनाइए





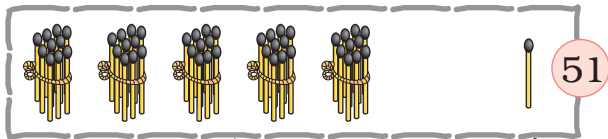
खाली स्थान में संख्या लिखिए।



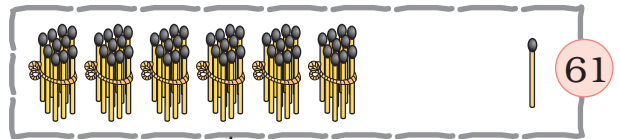


51 से 70 तक की संख्याएँ


खाली स्थान भरिए।




51



61



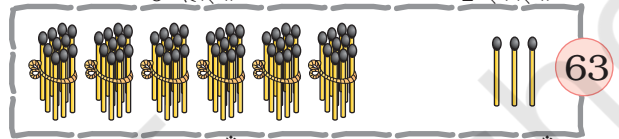
52




62



53




63



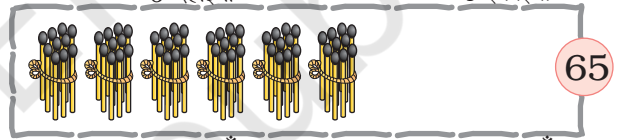
54



64



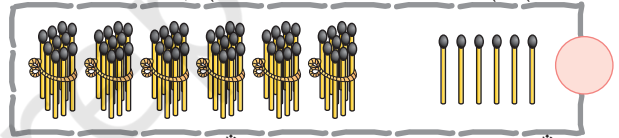
55



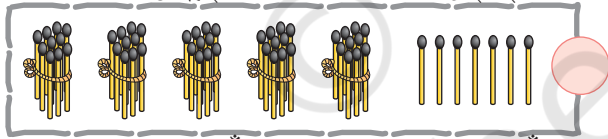
65



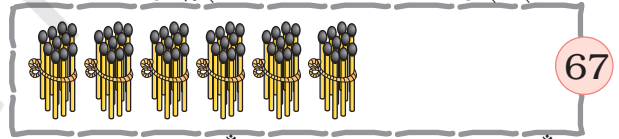
56



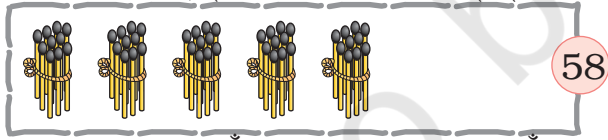
66



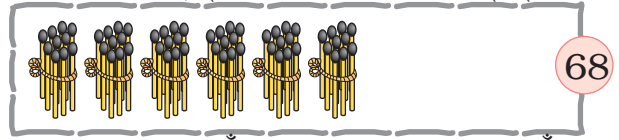
57



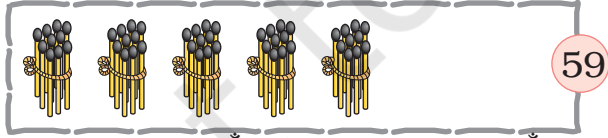
67



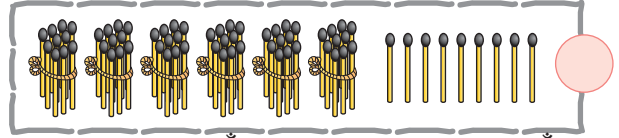
58



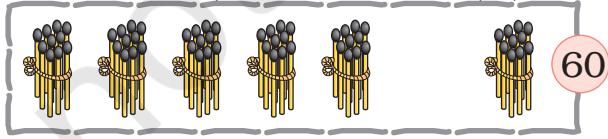
68



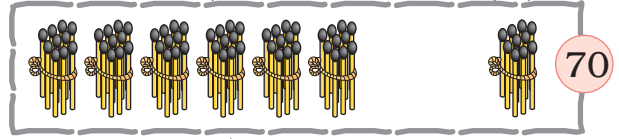
59



69



60



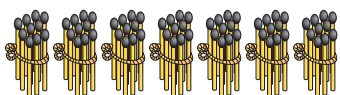

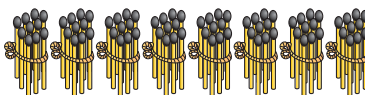

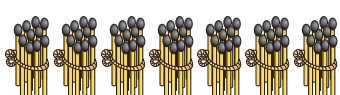

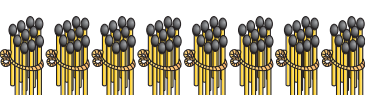



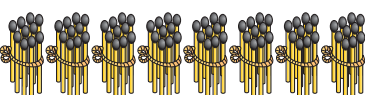

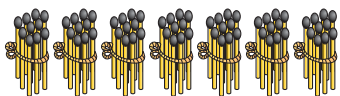

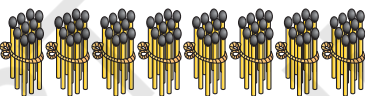

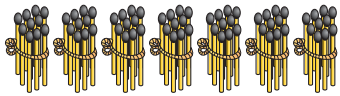

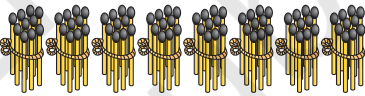

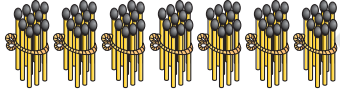

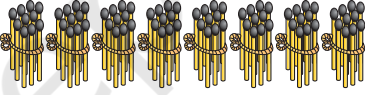

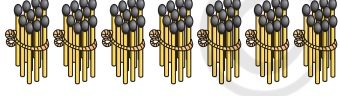

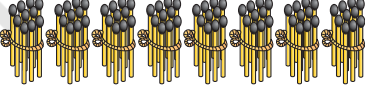

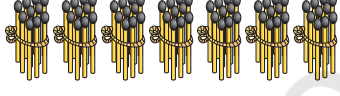

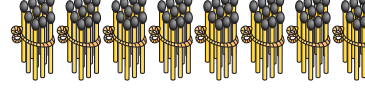




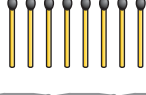


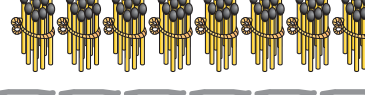

70





71 से 90 तक की संख्याएँ

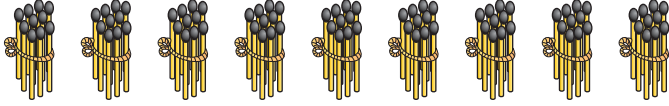

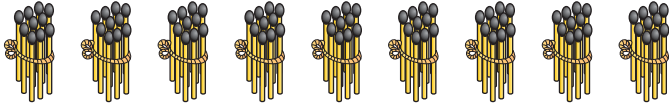
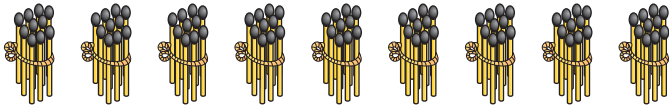

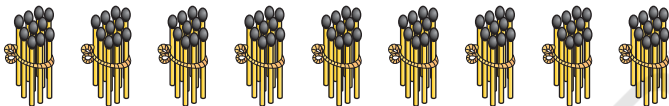
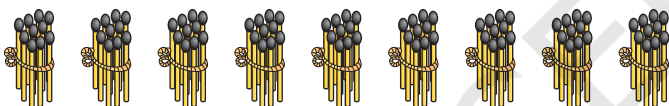

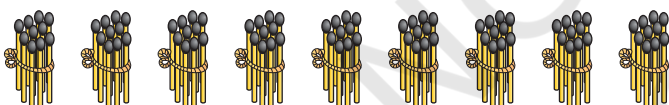
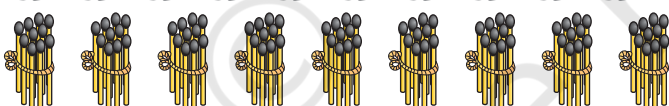

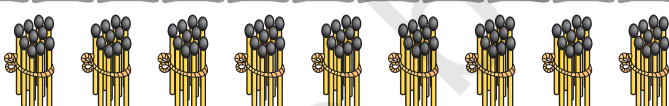

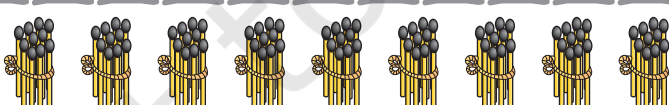

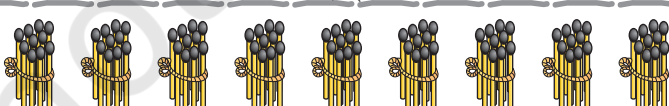

खाली स्थान भरिए।

 7 दहाइयाँ	 1 इकाई	71	 8 दहाइयाँ	 1 इकाई	81
 7 दहाइयाँ	 2 इकाईयाँ		 8 दहाइयाँ	 2 इकाईयाँ	82
 7 दहाइयाँ	 3 इकाईयाँ	73	 8 दहाइयाँ	 3 इकाईयाँ	
 7 दहाइयाँ	 4 इकाईयाँ	74	 8 दहाइयाँ	 4 इकाईयाँ	
 7 दहाइयाँ	 5 इकाईयाँ		 8 दहाइयाँ	 5 इकाईयाँ	85
 7 दहाइयाँ	 6 इकाईयाँ	76	 8 दहाइयाँ	 6 इकाईयाँ	86
 7 दहाइयाँ	 7 इकाईयाँ		 8 दहाइयाँ	 7 इकाईयाँ	
 7 दहाइयाँ	 8 इकाईयाँ		 8 दहाइयाँ	 8 इकाईयाँ	88
 7 दहाइयाँ	 9 इकाईयाँ	79	 8 दहाइयाँ	 9 इकाईयाँ	89
 7 दहाइयाँ	 1 दहाई	80	 8 दहाइयाँ	 1 दहाई	90



91 से 100 तक की संख्याएँ

खाली स्थान भरिए।

		91
9 दहाइयाँ	1 इकाई	
		92
9 दहाइयाँ	2 इकाइयाँ	
		93
9 दहाइयाँ	3 इकाइयाँ	
		94
9 दहाइयाँ	4 इकाइयाँ	
		95
9 दहाइयाँ	5 इकाइयाँ	
		96
9 दहाइयाँ	6 इकाइयाँ	
		
9 दहाइयाँ	7 इकाइयाँ	
		
9 दहाइयाँ	8 इकाइयाँ	
		
9 दहाइयाँ	9 इकाइयाँ	
		100
9 दहाइयाँ	1 दहाई	





छूटी हुई संख्याओं को लिखिए।

51	52	53	54	55	56	57	58	59	60
	62			65				69	
		73							80
			84				88		
		93		95				99	



आओ साँप-सीढ़ी का खेल खेलें।

