

घटाव

इनमें से निकालें तो



0120CH04



5

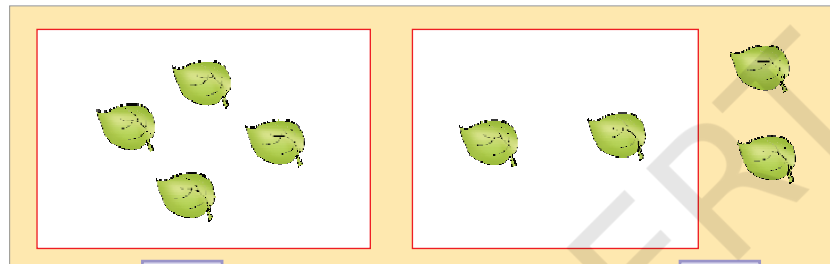


निकालें

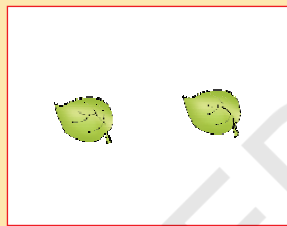
2

तो बचे

3




4



निकालें


2

तो बचे



निकालें

तो बचे



निकालें

तो बचे



शिक्षकों के लिए

घटाव की समझ विकसित करने के लिए पृष्ठ संख्या 142 देखें।





घटाव



6

—

4

=

2





5

—

2

=




9

—

4

=



5

—

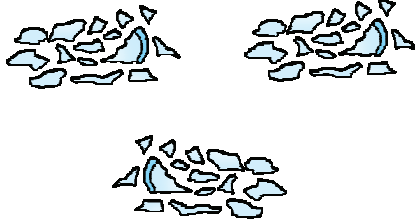

1

=







घटाव



—






=



—




=



—



=



—




=

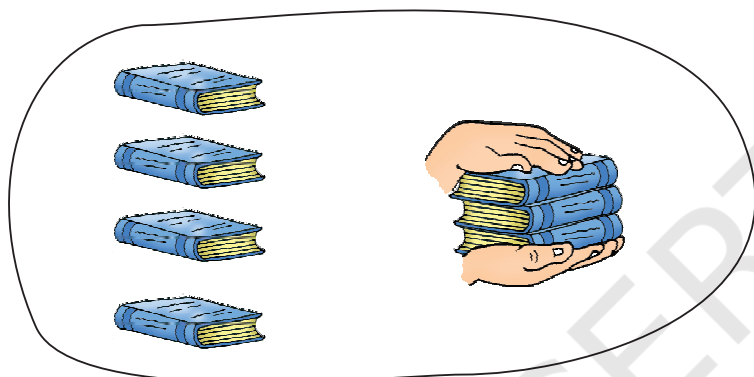





घटाव



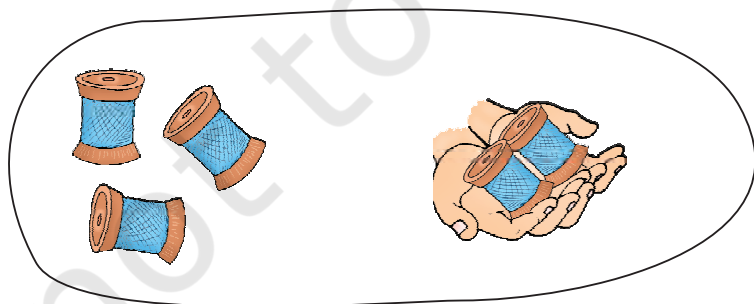
$$3 - 1 = 2$$



$$\square - \square = \square$$



$$\square - \square = \square$$



$$\square - \square = \square$$

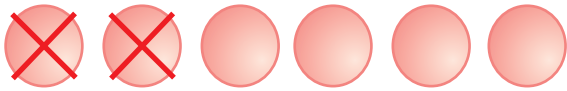


# घटाव



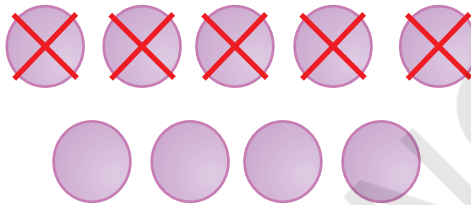
$$5 - 4 = \boxed{1}$$

$$\begin{array}{r} 5 \\ - 4 \\ \hline 1 \end{array}$$



$$6 - 2 = \boxed{\phantom{00}}$$

$$\begin{array}{r} 6 \\ - 2 \\ \hline \end{array}$$



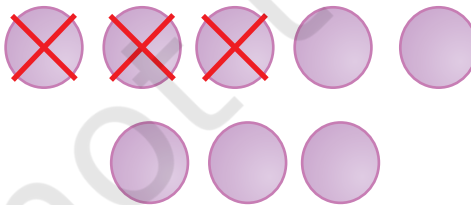
$$9 - 5 = \boxed{\phantom{00}}$$

$$\begin{array}{r} 9 \\ - 5 \\ \hline \end{array}$$



$$4 - 4 = \boxed{\phantom{00}}$$

$$\begin{array}{r} 4 \\ - 4 \\ \hline \end{array}$$



$$8 - 3 = \boxed{\phantom{00}}$$

$$\begin{array}{r} 8 \\ - 3 \\ \hline \end{array}$$





## घटाइए और मिलाइए

$4 - 2$

3

$9 - 5$

$7 - 2$

4

$8 - 2$

$9 - 1$

2

$7 - 4$

$5 - 1$

5

$8 - 0$

$6 - 3$

6

$5 - 3$

$7 - 1$

8

$8 - 3$

$5 - 0$

0

$7 - 7$



## घटाइए

$4 - 2 = \boxed{2}$

$4 - 0 = \boxed{\phantom{0}}$

$5 - 2 = \boxed{\phantom{0}}$

$6 - 5 = \boxed{\phantom{0}}$

$7 - 7 = \boxed{\phantom{0}}$

$8 - 4 = \boxed{\phantom{0}}$

$3 - 1 = \boxed{\phantom{0}}$



$$\begin{array}{r} 2 \\ - 0 \\ \hline \boxed{2} \end{array}$$

$$\begin{array}{r} 9 \\ - 7 \\ \hline \boxed{\phantom{0}} \end{array}$$

$$\begin{array}{r} 3 \\ - 0 \\ \hline \boxed{\phantom{0}} \end{array}$$

$$\begin{array}{r} 8 \\ - 8 \\ \hline \boxed{\phantom{0}} \end{array}$$

$$\begin{array}{r} 6 \\ - 4 \\ \hline \boxed{\phantom{0}} \end{array}$$

$$\begin{array}{r} 4 \\ - 2 \\ \hline \boxed{\phantom{0}} \end{array}$$







छूटी हुई संख्याएँ लिखिए

$$8 - \square = 7$$

$$\square - 2 = 3$$

$$5 - \square = 1$$

$$\square - 3 = 5$$

$$3 - \square = 3$$

$$\square - 2 = 0$$

$$9 - 2 = \square$$

$$\square - 2 = 7$$

